

た ざん 足 し 算

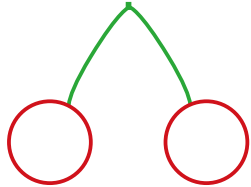
くりあがりのある「さくらんぼ計算」②

が 月 に 日 じ 時 ふん 分 ~ じ 時 ふん 分

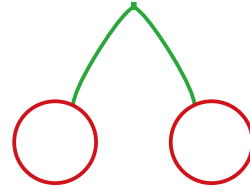
なまえ
名前

もんだい 問題 すうじ 〇に数字をいれて けいさん こと もと さくらんぼ計算で答えを求めましょう。

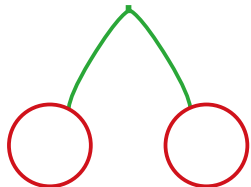
(1) $4 + 9 =$



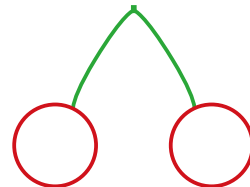
(2) $6 + 8 =$



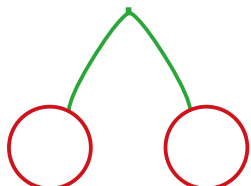
(3) $4 + 9 =$



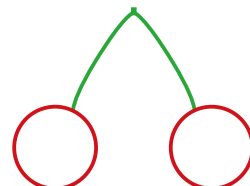
(4) $6 + 8 =$



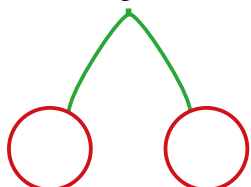
(5) $4 + 9 =$



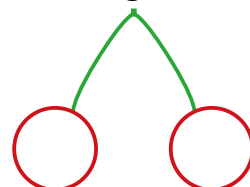
(6) $6 + 8 =$



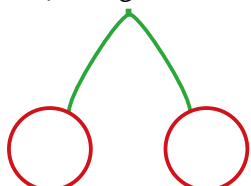
(7) $4 + 9 =$



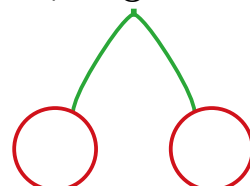
(8) $6 + 8 =$



(9) $4 + 9 =$



(10) $6 + 8 =$

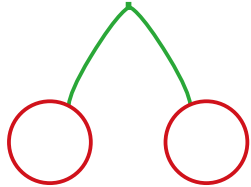


た ざん 足 し 算

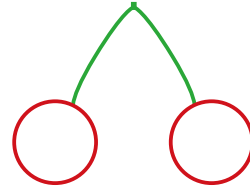
く あ けいさん
繰り上がりのある「さくらんぼ計算」②

もんだい 問題 ○に数字をいれて さくらんぼ計算で答えを求めましょう。

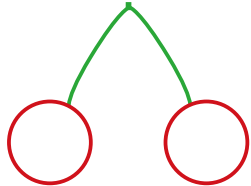
(1) $4 + 9 =$



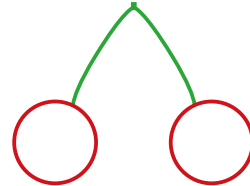
(2) $6 + 8 =$



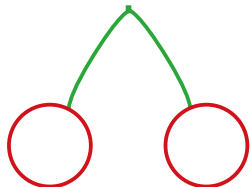
(3) $4 + 9 =$



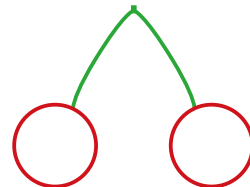
(4) $6 + 8 =$



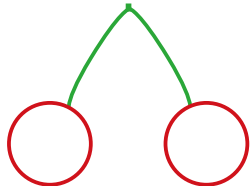
(5) $4 + 9 =$



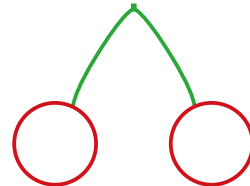
(6) $6 + 8 =$



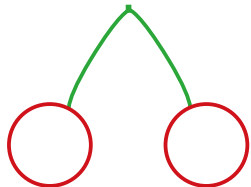
(7) $4 + 9 =$



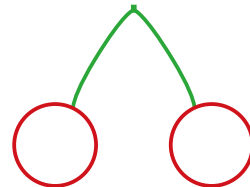
(8) $6 + 8 =$



(9) $4 + 9 =$



(10) $6 + 8 =$

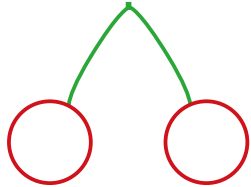


た ざん 足 し 算

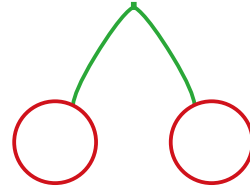
く あ けいさん
繰り上がりのある「さくらんぼ計算」②

もんだい 問題 ○に数字をいれて さくらんぼ計算で答えを求めましょう。

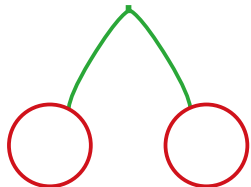
(1) $4 + 9 =$



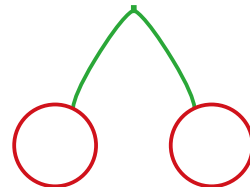
(2) $6 + 8 =$



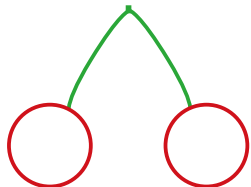
(3) $4 + 9 =$



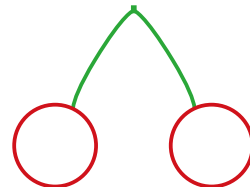
(4) $6 + 8 =$



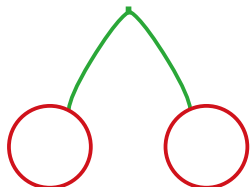
(5) $4 + 9 =$



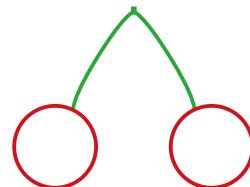
(6) $6 + 8 =$



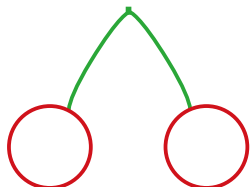
(7) $4 + 9 =$



(8) $6 + 8 =$



(9) $4 + 9 =$



(10) $6 + 8 =$

