

ひき算

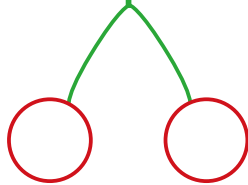
繰り下がりのある「さくらんぼ計算」②

月 日 時 分 ~ 時 分

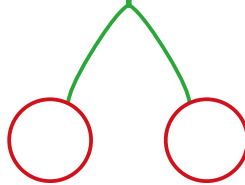
なまえ
名前

問題 ○に数字をいれて さくらんぼ計算で答えを求めましょう。

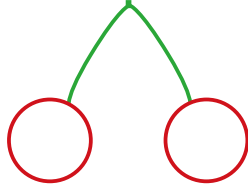
(1) $11 - 6 =$



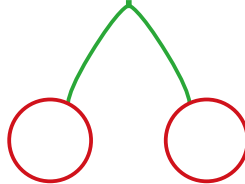
(2) $15 - 8 =$



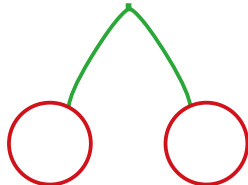
(3) $13 - 7 =$



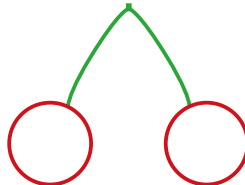
(4) $11 - 5 =$



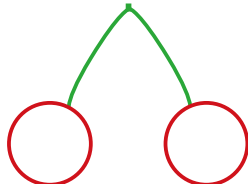
(5) $16 - 8 =$



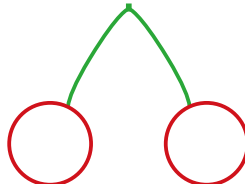
(6) $17 - 8 =$



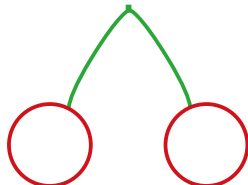
(7) $18 - 9 =$



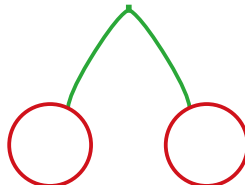
(8) $12 - 3 =$



(9) $14 - 7 =$



(10) $15 - 7 =$

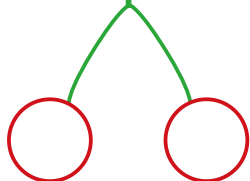


ひき算

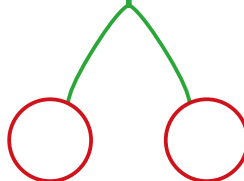
繰り下がりのある「さくらんぼ計算」②

問題 ○に数字をいれて さくらんぼ計算で答えを求めましょう。

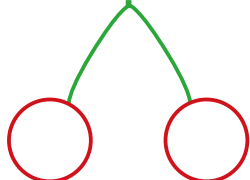
(1) $13 - 5 =$



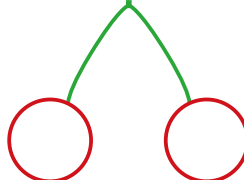
(2) $14 - 7 =$



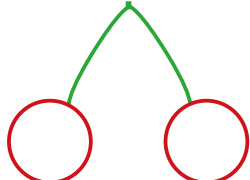
(3) $15 - 7 =$



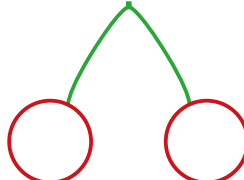
(4) $12 - 9 =$



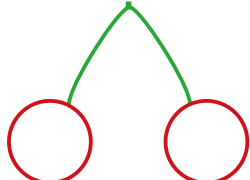
(5) $17 - 9 =$



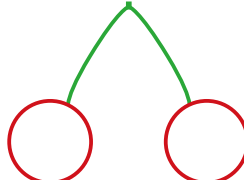
(6) $11 - 6 =$



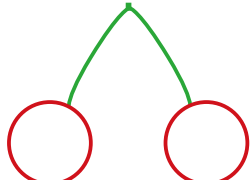
(7) $16 - 7 =$



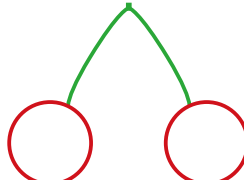
(8) $17 - 8 =$



(9) $18 - 9 =$



(10) $15 - 9 =$

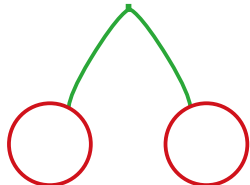


ひき算

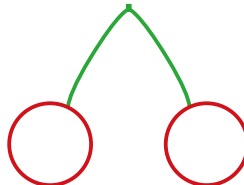
繰り下がりのある「さくらんぼ計算」②

問題 ○に数字をいれて さくらんぼ計算で答えを求めましょう。

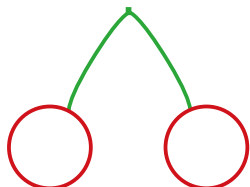
(1) $12 - 4 =$



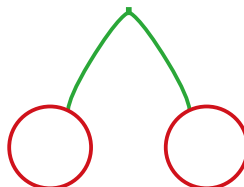
(2) $15 - 8 =$



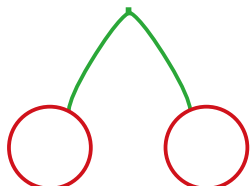
(3) $17 - 9 =$



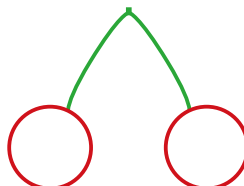
(4) $16 - 9 =$



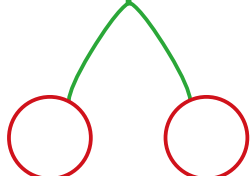
(5) $14 - 6 =$



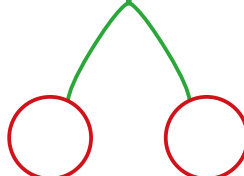
(6) $15 - 7 =$



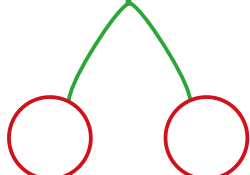
(7) $13 - 5 =$



(8) $11 - 5 =$



(9) $18 - 9 =$



(10) $14 - 8 =$

