

ひき算

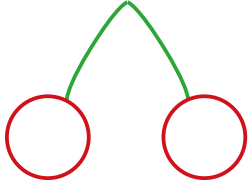
繰り下がりのある「さくらんぼ計算」①

が 月 に 日 じ 時 ふん 分 ~ じ 時 ふん 分

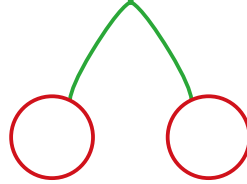
なまえ
名前

問題 ○に数字をいれて さくらんぼ計算で答えを求めましょう。

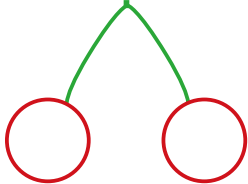
(1) $15 - 7 =$



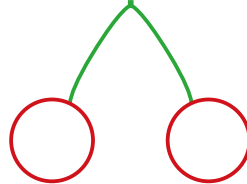
(2) $13 - 5 =$



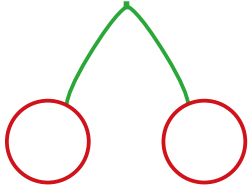
(3) $11 - 2 =$



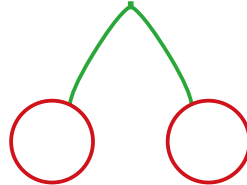
(4) $18 - 9 =$



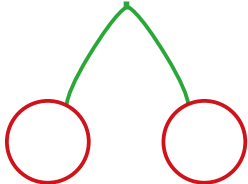
(5) $16 - 9 =$



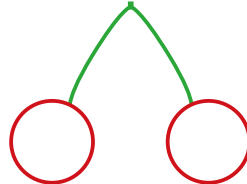
(6) $14 - 6 =$



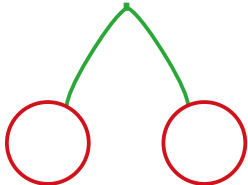
(7) $15 - 8 =$



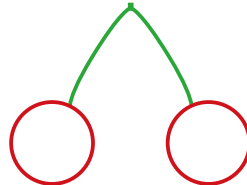
(8) $17 - 9 =$



(9) $11 - 4 =$



(10) $12 - 3 =$

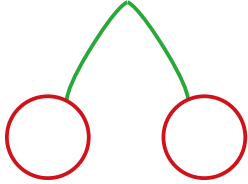


ひき算

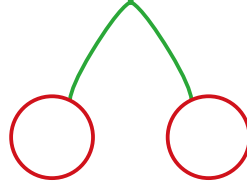
繰り下がりのある「さくらんぼ計算」①

問題 ○に数字をいれて さくらんぼ計算で答えを求めましょう。

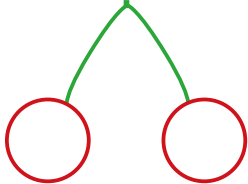
(1) $16 - 8 =$



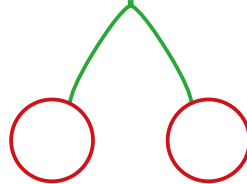
(2) $14 - 5 =$



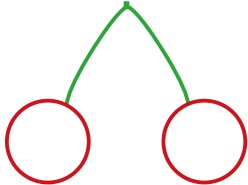
(3) $17 - 8 =$



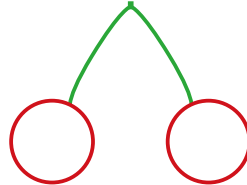
(4) $12 - 4 =$



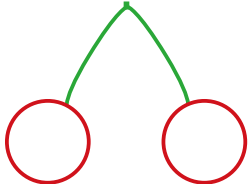
(5) $18 - 9 =$



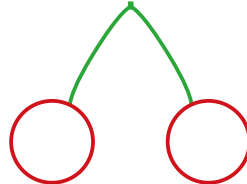
(6) $15 - 8 =$



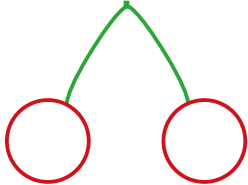
(7) $11 - 7 =$



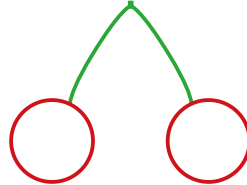
(8) $13 - 5 =$



(9) $14 - 9 =$



(10) $11 - 6 =$

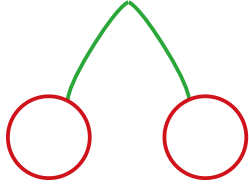


ひき算

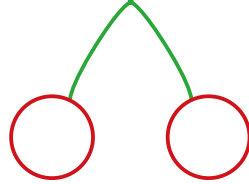
繰り下がりのある「さくらんぼ計算」①

問題 ○に数字をいれて さくらんぼ計算で答えを求めましょう。

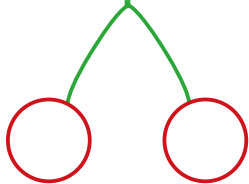
(1) $18 - 9 =$



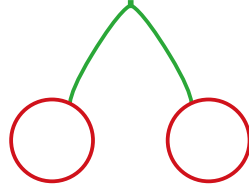
(2) $13 - 6 =$



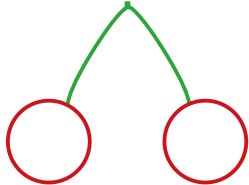
(3) $11 - 3 =$



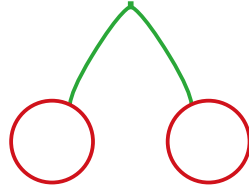
(4) $12 - 5 =$



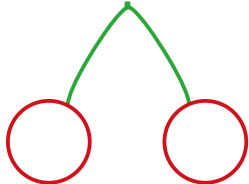
(5) $16 - 7 =$



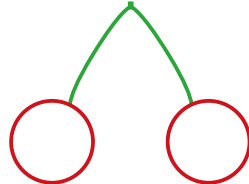
(6) $11 - 4 =$



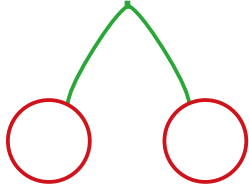
(7) $17 - 8 =$



(8) $15 - 6 =$



(9) $12 - 7 =$



(10) $14 - 9 =$

