

角の大きさ

角の大きさを測る [1]

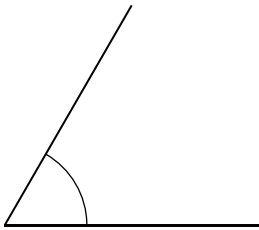
月 日 時 分 ~ 時 分

名前

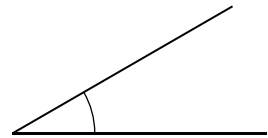
問

次の角の大きさを分度器はかを使って測りましょう。

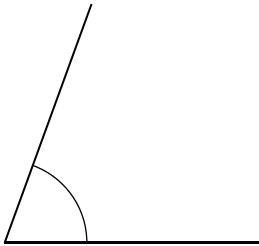
①



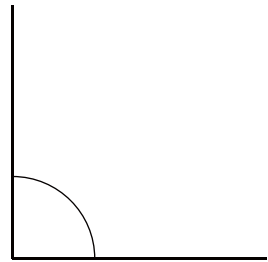
②



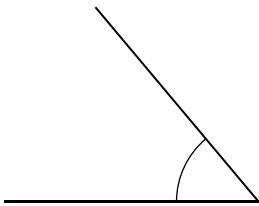
③



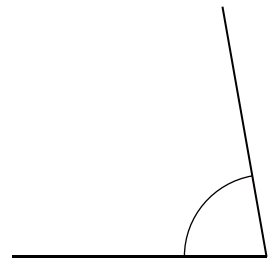
④



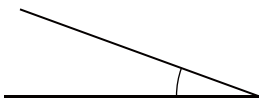
⑤



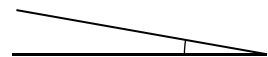
⑥



⑦



⑧



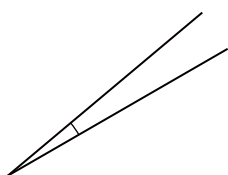
角の大きさ

角の大きさを測る [1]

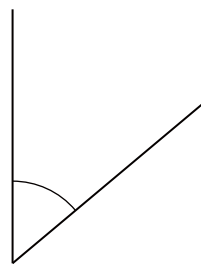
問

次の角の大きさを分度器を使って測りましょう。

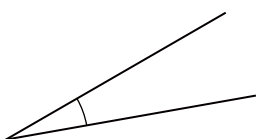
①



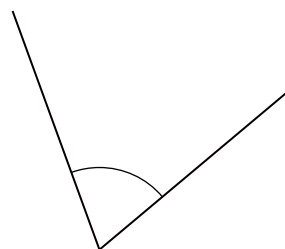
②



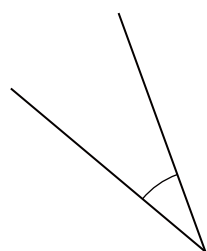
③



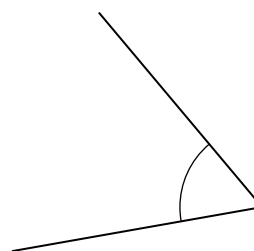
④




⑤



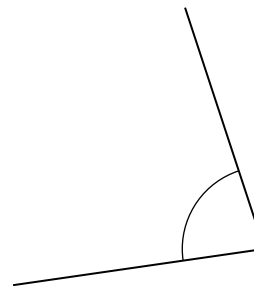
⑥



⑦



⑧



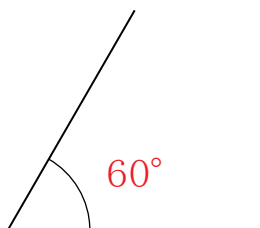
角の大きさの答え

角の大きさを測る [1]

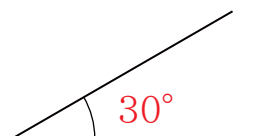
問

次の角の大きさを分度器を使って測りましょう。

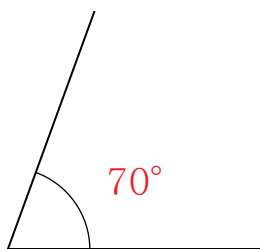
①



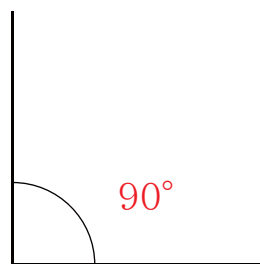
②



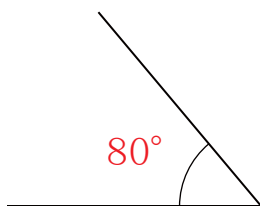
③



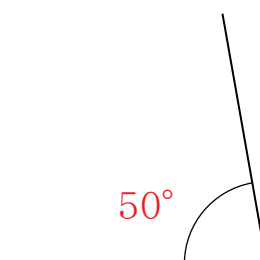
④



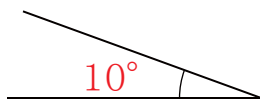
⑤



⑥



⑦



⑧



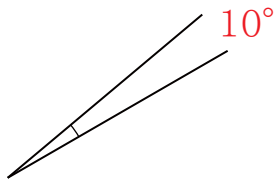
角の大きさの答え

角の大きさを測る [1]

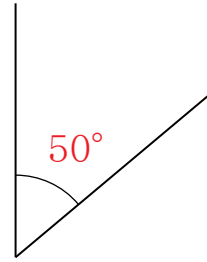
問

次の角の大きさを分度器を使って測りましょう。

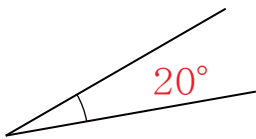
①



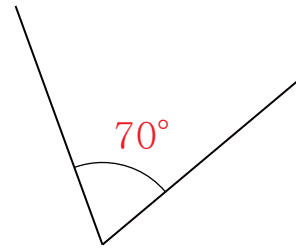
②



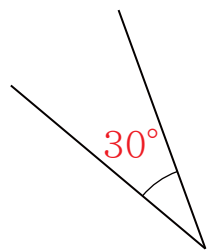
③



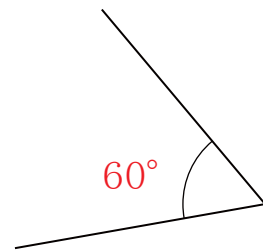
④



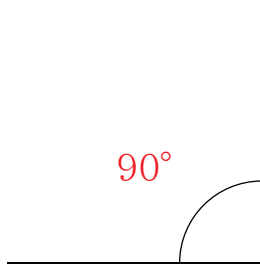
⑤



⑥



⑦



⑧

