

分数の答え

あらわ
分数の表し方

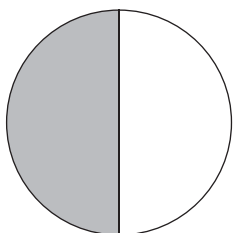
月 日 時 分 ~ 時 分

名前

問  色にぬられた部分の大きさは元の大きさの何分の一ですか。

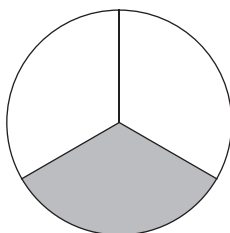
それぞれ分数で答えましょう。

①



$\frac{1}{2}$

②



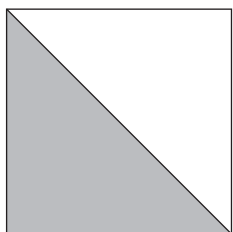
$\frac{1}{3}$

③




$\frac{1}{2}$

④



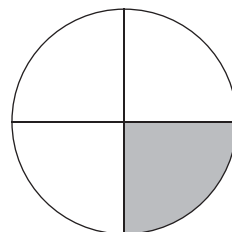
$\frac{1}{2}$

⑤



$\frac{1}{3}$


⑥



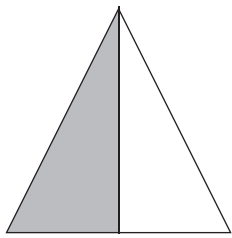
$\frac{1}{4}$

分数の答え

あらわ
分数の表し方

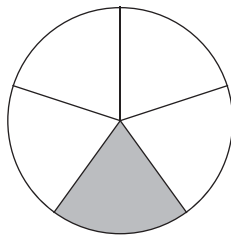
問  色にぬられた部分の大きさは元の大きさの何分の一ですか。
それぞれ分数で答えましょう。

①




$$\underline{\frac{1}{2}}$$

②




$$\underline{\frac{1}{5}}$$

③



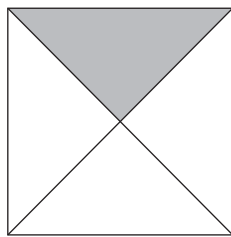
$$\underline{\frac{1}{2}}$$

④




$$\underline{\frac{1}{4}}$$

⑤



$$\underline{\frac{1}{4}}$$

⑥



$$\underline{\frac{1}{5}}$$


分数の答え

あらわ
分数の表し方

問 ■色にぬられた部分の^ぶ大きさは元の大きさの何分の一ですか。

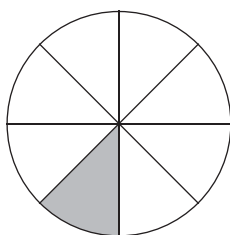
それぞれ分数で答えましょう。

①



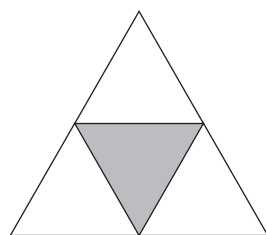
$$\frac{1}{5}$$

②



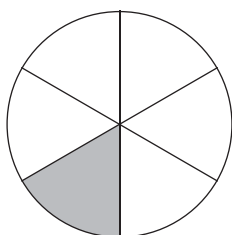
$$\frac{1}{8}$$

③



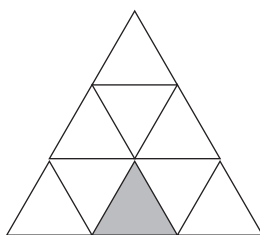
$$\frac{1}{4}$$

④




$$\frac{1}{6}$$

⑤



$$\frac{1}{9}$$

⑥



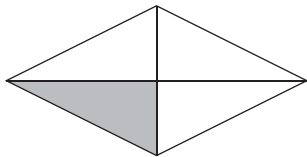
$$\frac{1}{6}$$

分数の答え

あらわ 分数の表し方

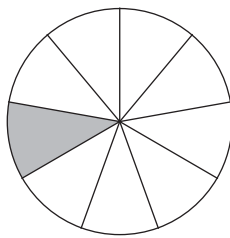
問 ■色にぬられた部分の^ぶ大きさは元の大きさの何分の一ですか。
それぞれ分数で答えましょう。

①




$$\underline{\frac{1}{4}}$$

②



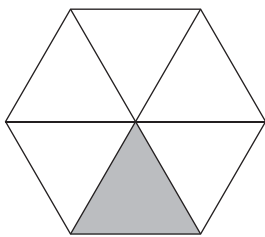
$$\underline{\frac{1}{9}}$$

③



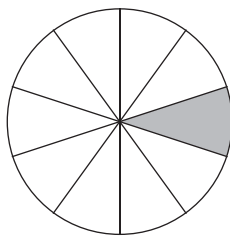
$$\underline{\frac{1}{10}}$$

④




$$\underline{\frac{1}{6}}$$

⑤



$$\underline{\frac{1}{10}}$$

⑥



$$\underline{\frac{1}{9}}$$